

## โจทย์การบวก ลบ คูณ หารระคน

เติมตัวเลขแสดงจำนวนลงใน 


$$8 - (5 + 1) = 8 - \square$$
$$= \square$$

$$15 + (10 \times 2) = 15 + \square$$
$$= \square$$

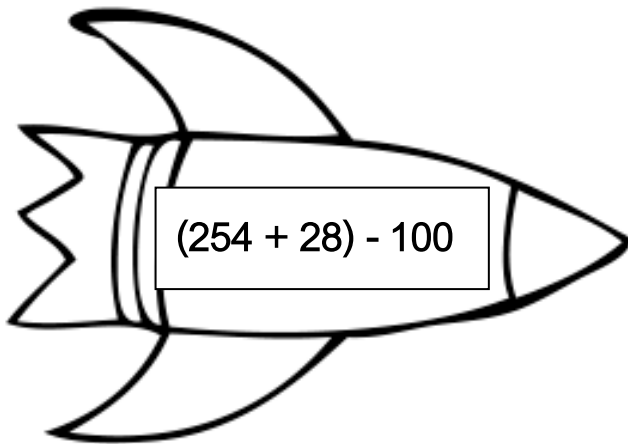
$$40 \div (34 - 26) = \square \div \square$$
$$= \square$$

$$12 \times (35 \div 7) = \square \times \square$$
$$= \square$$

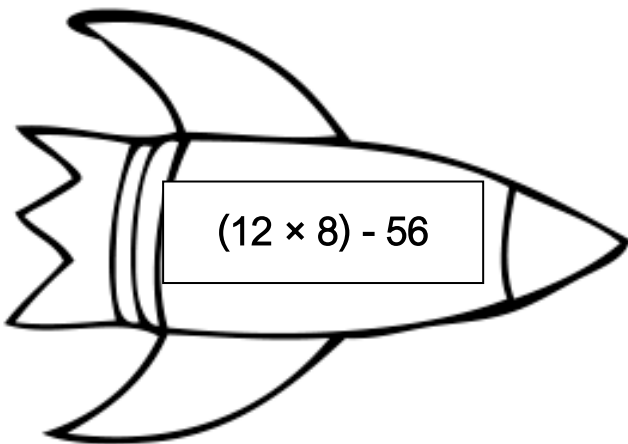

$$(81 \div 9) - (5 + 3) = \square - \square$$
$$= \square$$



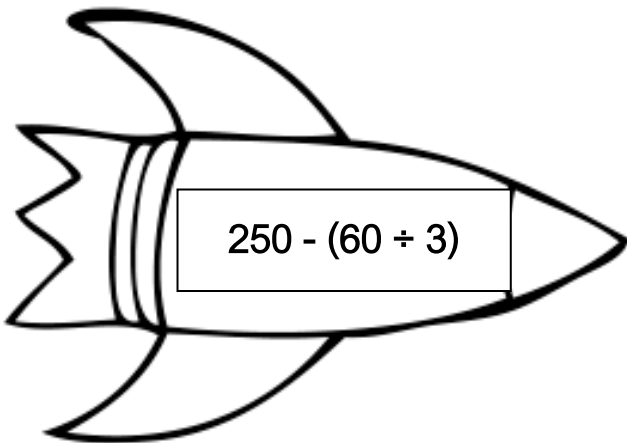

เติมคำตอบในช่องว่างให้ถูกต้อง



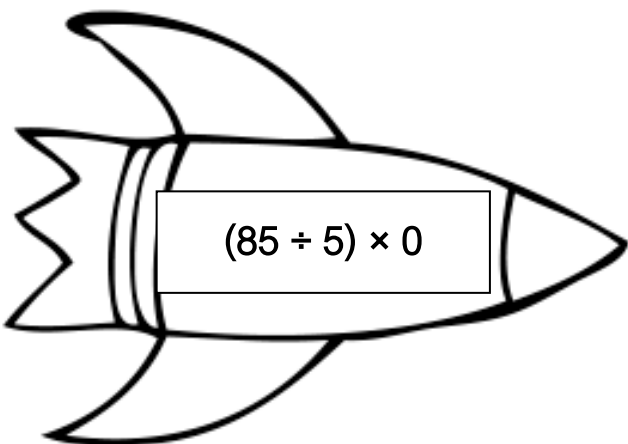

=



=



=



=

